

Wednesday Maths

If you have collected data to present about the rainbows spotted in your local area do the following:





1* Create a Pictogram like the one we saw yesterday with your information. Rather than circles you could use squares as they are easier to be consistently sized.


2 and 3*** Create a Bar chart with the information you have recorded.

Remember when creating a bar chart you will need to:

- Use a ruler
- Decide on the scale for the X axis (The vertical one)
- Space out your bars evenly.
- Put a title - this could be A bar chart to show how many rainbows spotted in my local area.
- Label your axis (Number of rainbows / Street names)

ALL: If you haven't managed to get the data then use one of the tables below to present the information at a suitable challenge for you!

Team	Number of house points
Sycamore	
Oak	
Beech	
Ash	

 = 20 points

Day	Number of tickets sold
Monday	55
Tuesday	30
Wednesday	45
Thursday	75
Friday	85