

Compare numbers within 50

I Tick the number sentences that are true.

Use cubes or counters to help you.

a) 12 is more than 13

b) 33 is less than 41

c) 2 tens and 8 ones is equal to twenty-eight

d) $40 + 8$ is more than $30 + 9$

e) Thirty-one is less than 3 tens





2 Write the missing phrase.

greater than

less than

equal to

a) 22 is _____ 29


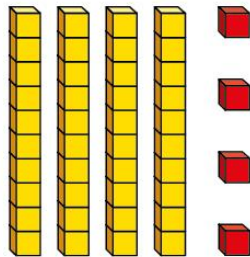


b) 41 is _____ 4 tens

c) Forty-six is _____ $40 + 3$

d) $40 + 8$ is _____ one more than 47

3 Write $<$, $>$ or $=$ in each circle.

24



3 tens and 14 ones



4 Complete the table.

Write or draw your answers.

	is more than	
	=	
	>	
	is less than	
	is equal to	