

# Numbers from 11 to 20

**I** Complete the table.



Picture	Numeral	Word
	20	



Picture	Numeral	Word
	12	
		seventeen



**2** Draw counters to show 14 in three different ways.

**a)**



**b)**

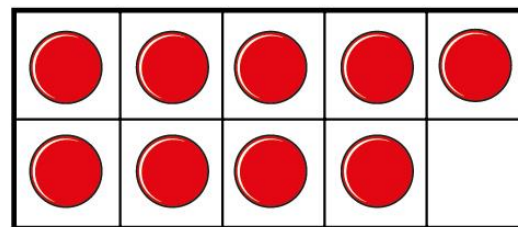




**c)**



3

I have made  
the number 19



Has Teddy made the number 19?

