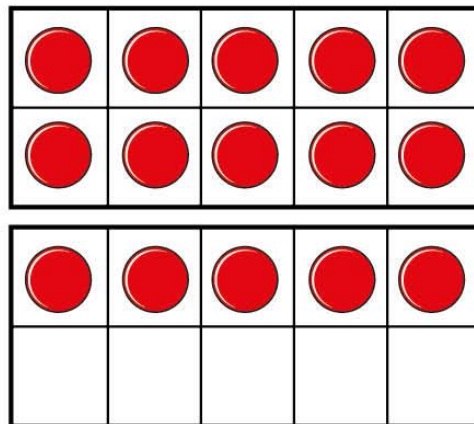


Subtraction – not crossing 10

I Cross out counters to work out the subtractions.

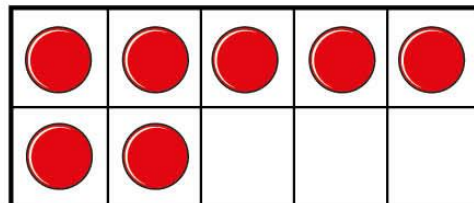

a)



$$15 - 4 =$$

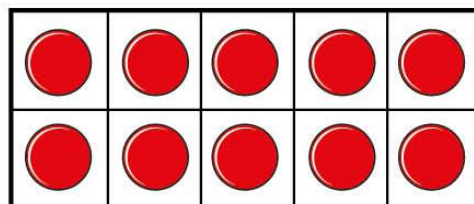
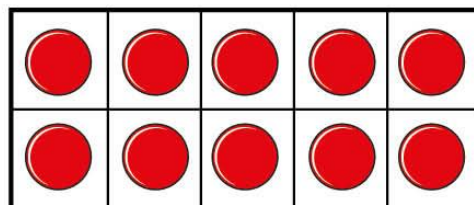


I b)




$$17 - 5 = \square$$

c)



$$\square = 20 - 3$$

2 Teddy has these shapes.



He gives Eva 3 cones.

How many cones does Teddy have left?

$$\square - \square = \square$$

Teddy has cones left.

3 Complete the subtractions.

a) $13 - 2 =$

c) $15 - 4 =$

b) $14 - 3 =$

d) $16 - 5 =$

What do you notice?

Use this to fill in the missing numbers.

$17 -$ $= 11$

$19 -$ $= 11$

