

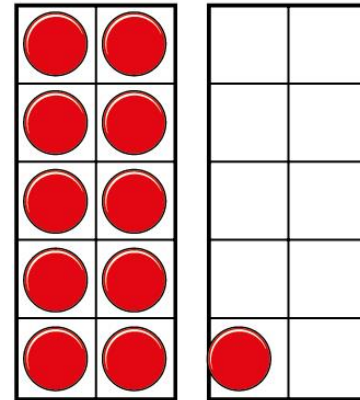


Order numbers within 50

I a) What are the numbers?





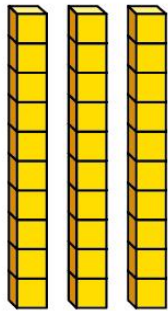



- I** Write the numbers in order.
Start with the smallest number.

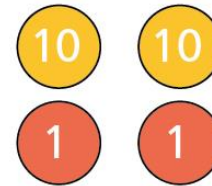
smallest

greatest

I b) What are the numbers?







Write the numbers in order.

Start with the smallest number.


smallest

greatest



- 2** Write the numbers in order.
Start with the smallest number.

a)



smallest

greatest

2 b)

39

49

29

smallest

greatest



- 3** Write the numbers in order.
Start with the greatest number.

17 41 28

greatest

smallest

4 Complete the number sentence.

2 tens and 3 ones < < forty-one

Is there more than one answer?

