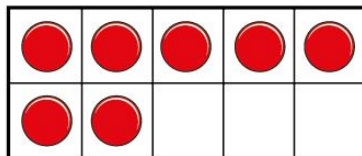
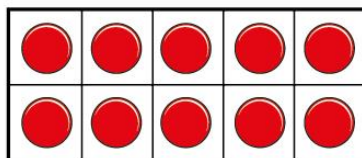


Count forwards and backwards and write numbers to 20 in numerals and words

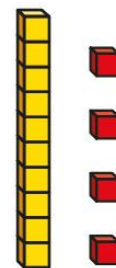
I Match the picture to the numeral.



12

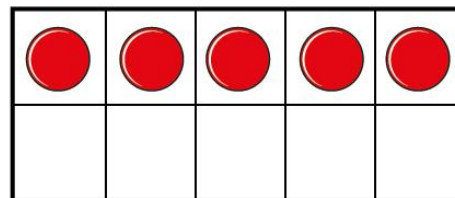
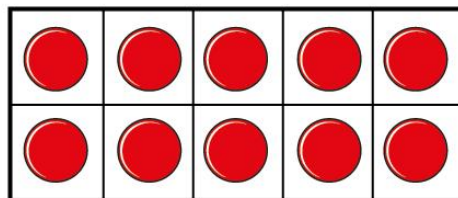


14



17

2 Here is a number.



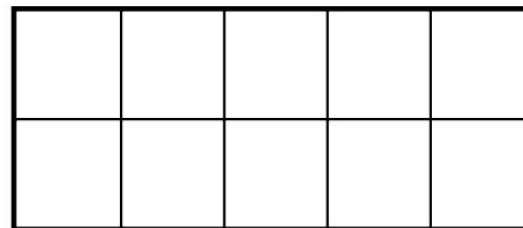
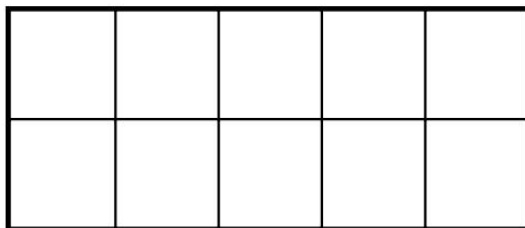
a) What is the number?

2

b) Use counters and ten frames.

Make this number in a different way.

Draw your counters.



3 Write the numerals in words.

a) 12 _____

b) 13 _____

c) 15 _____

d) 18 _____

e) 20 _____

4 Complete the number tracks.

10	11	12							
----	----	----	--	--	--	--	--	--	--

			12	13					
--	--	--	----	----	--	--	--	--	--

18	17								
----	----	--	--	--	--	--	--	--	--