

Compare groups of objects


1 Annie and Tommy have these sweets.



Annie



Tommy



I a) Who has the least sweets? _____

Complete the sentence.

is less than

b) Who has the most sweets? _____

Complete the sentence.

is more than



2 Teddy and Amir have these cookies.

Teddy 

Amir 

Who has the most cookies? _____

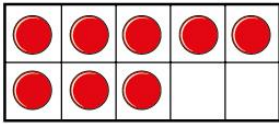
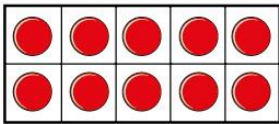
How do you know?

Complete the sentence.

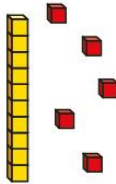


is more than



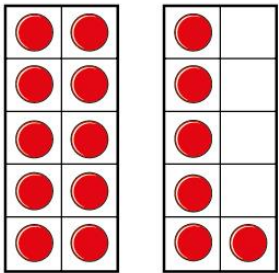
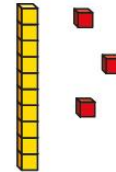
3 Write greater or less to complete the statements.



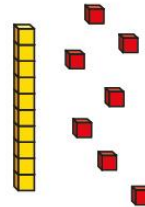
is _____ than



is _____ than



is _____ than





4

Draw counters to make the statement true.

a)

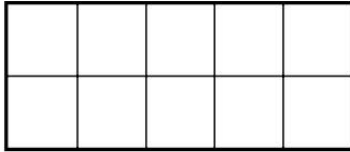
is greater than

b)

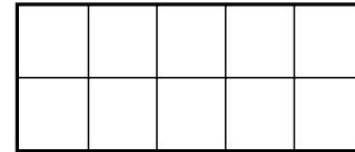
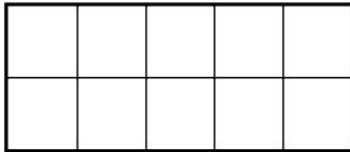
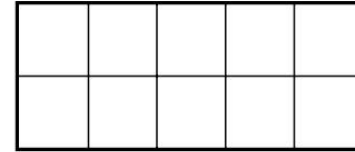
is less than

4

c)



is equal to



Is there more than one answer for each?

